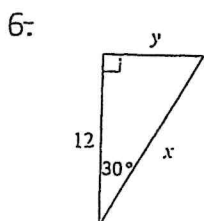
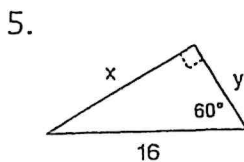
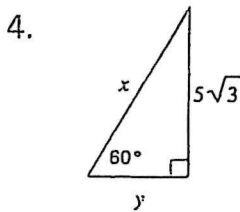
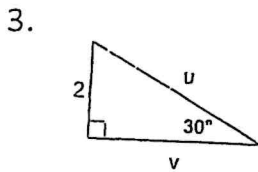
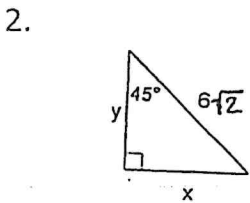
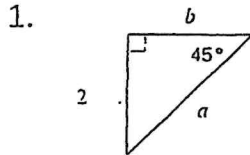


Section 8.0 Worksheet #1

Special Right Triangles

Find the value of each variable:



ANSWERS:

1. $a =$ _____

$b =$ _____

2. $x =$ _____

$y =$ _____

3. $u =$ _____

$v =$ _____

4. $x =$ _____

$y =$ _____

5. $x =$ _____

$y =$ _____

6. $x =$ _____

$y =$ _____