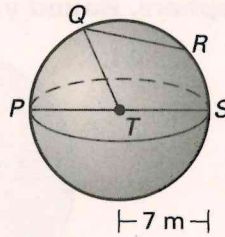


LESSON
12.6

Practice A

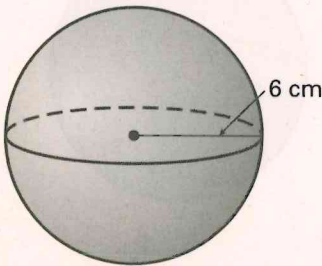
For use with pages 838–845

1. Name the center of the sphere.
2. Name a chord of the sphere.
3. Name a segment that is a radius of the sphere.
4. Name a segment that is a diameter of the sphere.
5. Find the circumference of the great circle that contains P and S . Write your answer in terms of π .

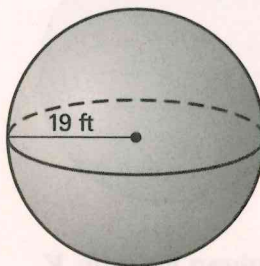


Find the surface area of the sphere. Round your answer to two decimal places.

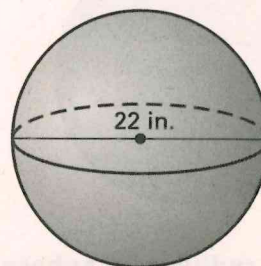
6.



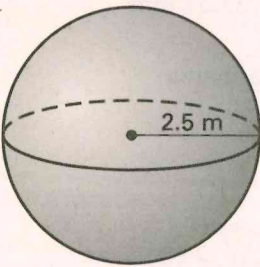
7.



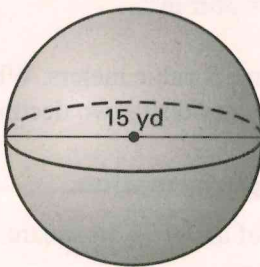
8.



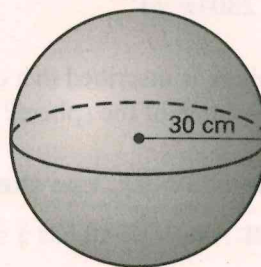
9.



10.

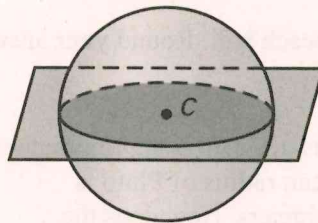


11.



In Exercises 12–15, use the diagram. The center of the sphere is C and its circumference is 17π feet.

12. What is half of the sphere called?
13. Find the radius of the sphere.
14. Find the diameter of the sphere.
15. Find the surface area of half the sphere.



Find the radius of a sphere with the given surface area S .

16. $S = 324\pi \text{ cm}^2$

17. $S = 4\pi \text{ ft}^2$

18. $S = 163.84\pi \text{ m}^2$

19. The circumference of a great circle of a sphere is 338π meters. What is the surface area of the sphere? Round your answer to two decimal places.

Name _____

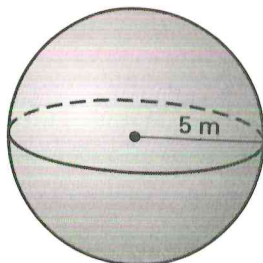
Date _____

LESSON
12.6

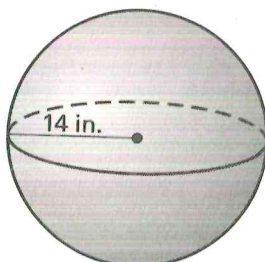
Practice A *continued*
For use with pages 838–845

Find the volume of the sphere. Round your answer to two decimal places.

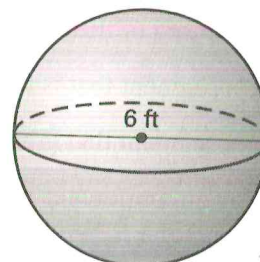
20.



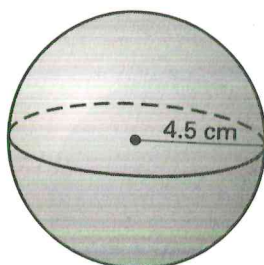
21.



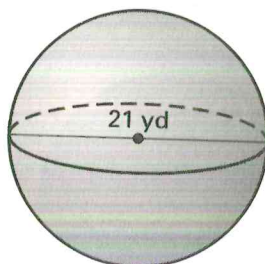
22.



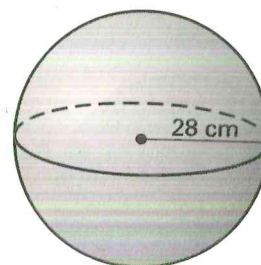
23.



24.



25.



Find the radius of a sphere with the given volume V .

26. $V = 2304\pi \text{ yd}^3$

27. $V = 36\pi \text{ in.}^3$

28. $V = 33.51 \text{ mm}^3$

29. A sphere is inscribed in a cube of volume 8 cubic meters. What is the surface area and volume of the sphere? Round your answers to two decimal places.

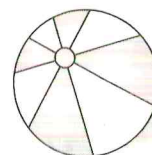
In Exercises 30–32, use the following information.

Beach Ball A beach ball has a surface area of about 78.54 square feet.

30. Find the radius of the beach ball.

31. Find the circumference of a great circle of the beach ball. Round your answer to two decimal places.

32. Find the volume of the beach ball. Round your answer to two decimal places.



$S = 78.54 \text{ ft}^2$

33. **Planets** The mean radius of Earth is approximately 6378 kilometers. The mean radius of Pluto is approximately 1160 kilometers. How does the surface area of Pluto compare to the surface area of Earth?

