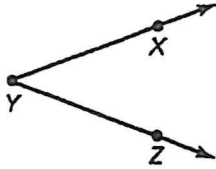


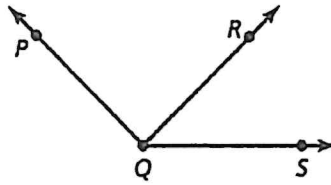
Worksheet 8.5

Name: _____

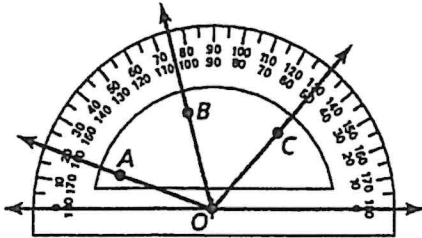
1. Write three names for the angle.



2. Name three different angles in the diagram.

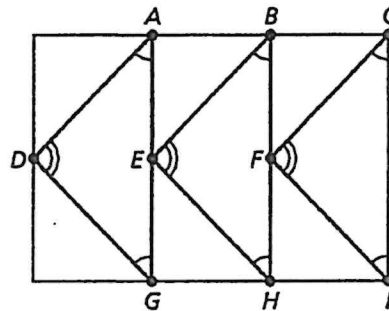


3. Find the angle measure of $\angle COA$. Then classify the angle.



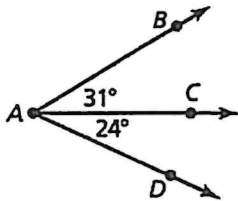
In Exercises 4–7, $m\angle ADG = 92^\circ$ and $m\angle DAG = 44^\circ$.

4. Identify the angles congruent to $\angle ADG$.
5. Identify the angles congruent to $\angle DAG$.
6. Find $m\angle CFI$.
7. Find $m\angle EHB$.

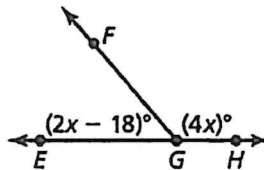


In Exercises 8 and 9, find the indicated angle measure.

8. Find $m\angle BAD$.

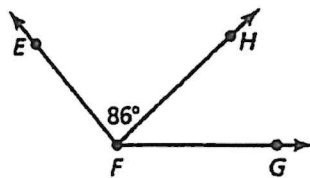


9. Find x .

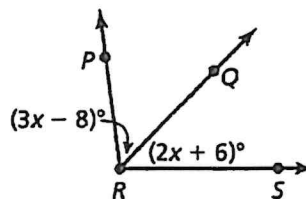


In Exercises 5–8, find the indicated angle measure.

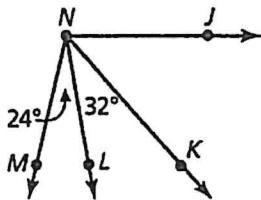
5. $m\angle EFG = 130^\circ$. Find $m\angle HFG$.



6. $m\angle PRS = 98^\circ$. Find $m\angle QRS$.



7. $m\angle JNM = 103^\circ$. Find $m\angle JNK$.



8. Find $m\angle WXZ$.

